




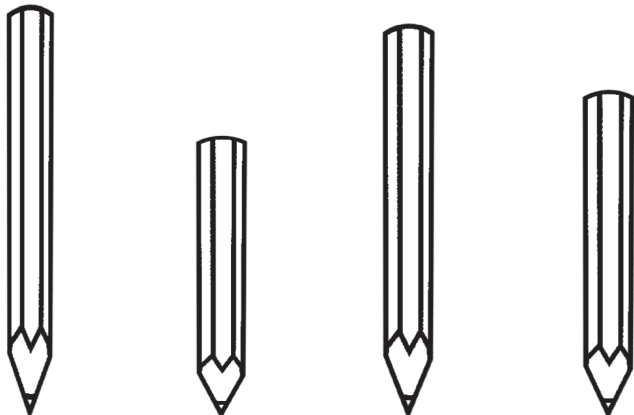
Q1 Kwenye picha hii, paka yupi yupo ndani ya boksi?



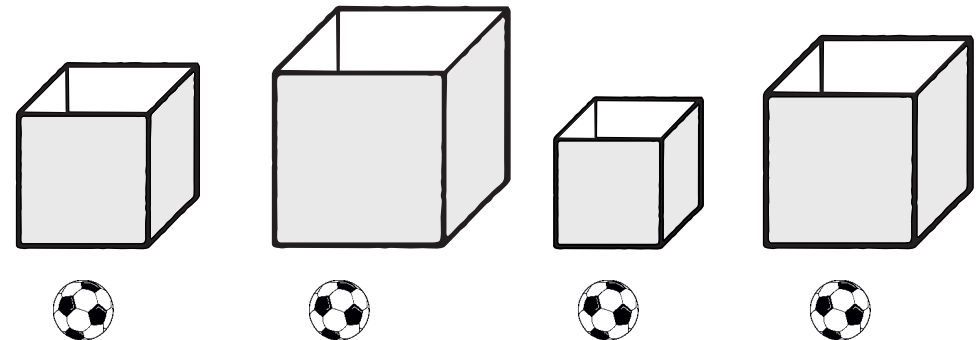
Q2 Kwenye picha hii, mtoto yupi yupo mbali zaidi na mti?




Q3 Kwenye picha hii, kalamu ipi ni fupi zaidi?



Q4 Hapa kuna mipira yenye ukubwa sawa. Angalia ukubwa wa maboksi kwa umakini. Kama kila boksi litajazwa ni mipira hiyo, boksi lipi litakuwa na idadi kubwa ya mipira?



Angalia jedwali hili kwa umakini.




Q5 Kuna mapeazi mangapi?


Q6 Ndizi zimezidi idadi ya machungwa kwa ngapi?

Ni muda gani unaoneshwa kwenye saa hizi?

Q7



Q8



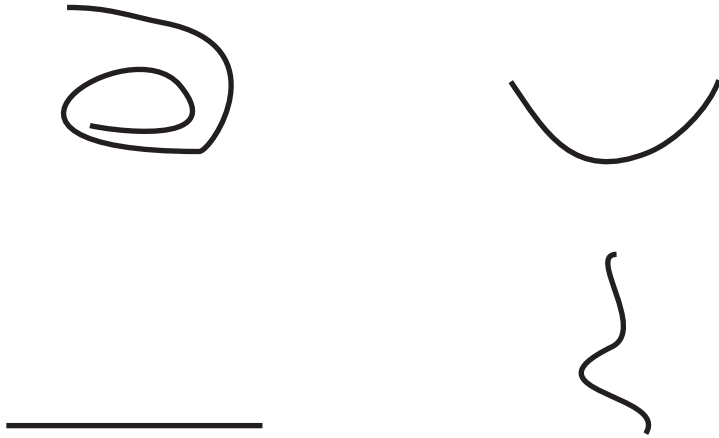
Angalia kalenda hii.

MACHI 2019						
JUMAPILI	JUMATATU	JUMANNE	JUMATANO	ALHAMISI	IJUMAA	JUMAMOSI
					1	2
3	4	5	6	7	8	9
10	11	12	13	14	15	16
17	18	19	20	21	22	23
24	25	26	27	28	29	30
31						

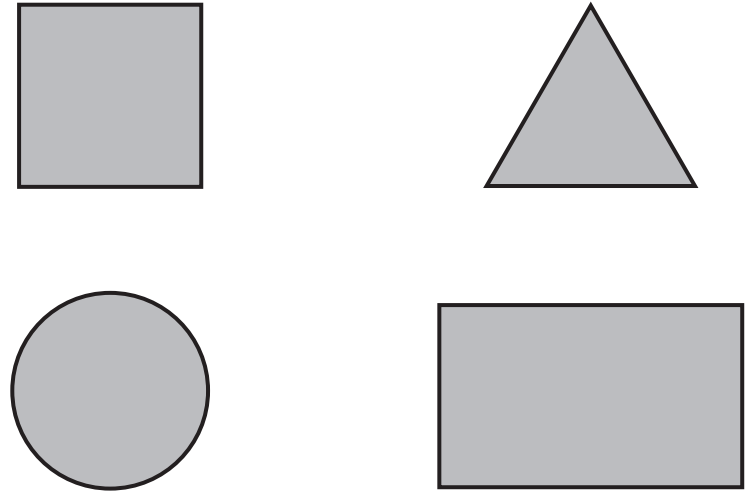
Q9 Tarehe 5 Machi ni siku gani ya wiki?

Q10 Jumatatu ya pili ya mwezi ni tarehe ngapi?


Q11 Upi ni mstari mnyoofu kati ya mistari ifuatayo?



Q12 Angalia haya maumbo, umbo lipi ni pembetatu?



Q13 Kuna jumla ya ndege wangapi? Chagua jibu sahihi



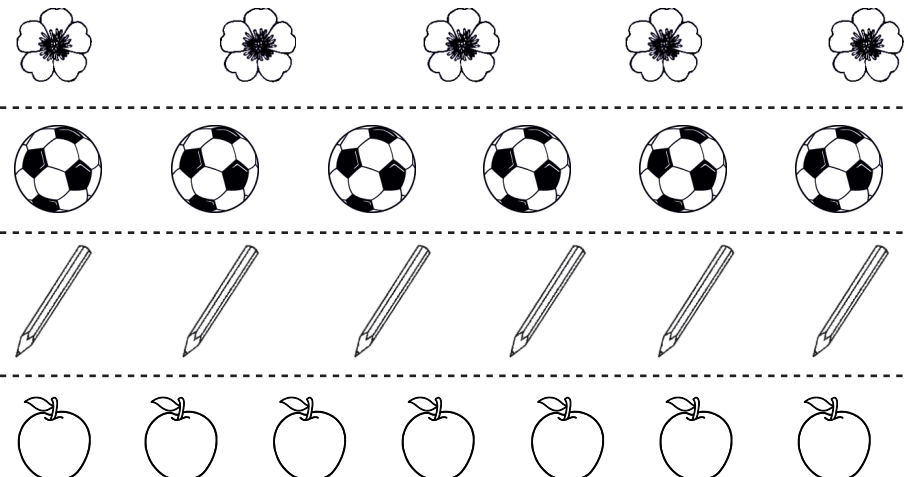
6

8

9

5

Q14 Angalia kwa makini makundi haya manne ya vitu.
Je kundi lipi lina vitu vingi zaidi?



Seti ya 2

Q15 Tambua namba.

3		2
0	8	9

Angalau namba 4 kati ya 5 ziwe sahihi

Fanya maswali yafuatayo.

Q16

$$\begin{array}{r} 32 \\ + 15 \\ \hline \hline \end{array}$$

Q17

$$\begin{array}{r} 46 \\ - 21 \\ \hline \hline \end{array}$$

Q18

$$2 \times 4 =$$

Q19

$$9 \div 3 =$$

Seti ya 3

Q20 Tambua namba.

48		22
97	84	30

Angalau namba 4 kati ya 5 ziwe sahihi

Fanya maswali yafuatayo.

Q21

$$\begin{array}{r} 56 \\ + 17 \\ \hline \hline \end{array}$$

Q22

$$\begin{array}{r} 78 \\ - 29 \\ \hline \hline \end{array}$$

Q23

$$\begin{array}{r} 42 \\ \times 6 \\ \hline \hline \end{array}$$

Q24

$$7 \overline{) 93}$$


Q25 Sikiliza swali kwa makini, kisha fanya na utoe jibu.

Kuna watoto 43 uwanjani. Kati ya hao, watoto 25 wameenda nyumbani. Je watakuwa wamebaki watoto wangapi uwanjani?

Q26 Sikiliza swali kwa makini, kisha fanya na utoe jibu.

Muuzi duka ana maembe 48. Anahifadhi maembe 3 katika kila kasha. Je atahitaji makasha mangapi kama hayo ya kutosha maembe yote?

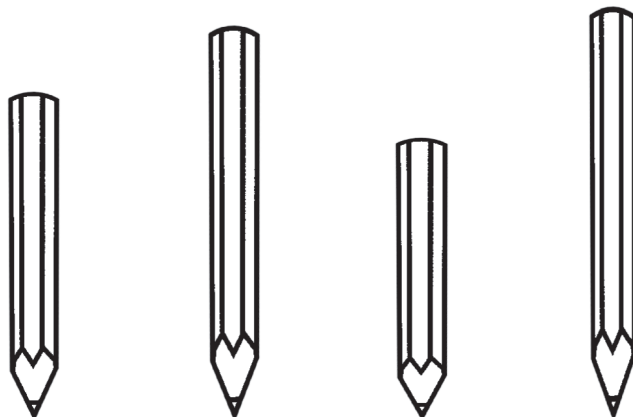
Q1 Katika picha hii, mbwa yupi yupo ndani ya boksi?



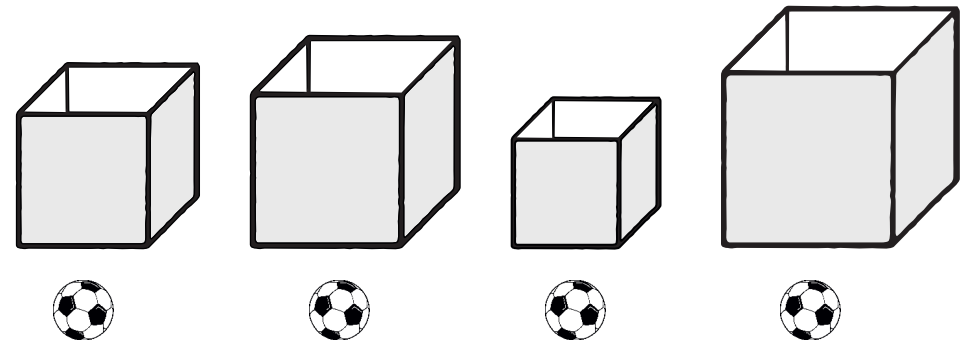
Q2 Katika picha hii, mtoto yupi yupo mbali zaidi na mti?



Q3 Katika picha hii, ni kalamu ipi ni fupi zaidi?



Q4 Hapa kuna mipira yenye ukubwa sawa. Angalia ukubwa wa maboksi kwa umakini. Kama kila boksi litajazwa ni mipira hiyo, boksi lipi litakuwa na idadi kubwa ya mipira?



Angalia jedwali hili kwa makini.


15			
14			
13			
12		🍎	
11		🍎	
10		🍎	
9		🍎	
8	🍌	🍎	
7	🍌	🍎	
6	🍌	🍎	
5	🍌	🍎	🍊
4	🍌	🍎	🍊
3	🍌	🍎	🍊
2	🍌	🍎	🍊
1	🍌	🍎	🍊
0	🍌	🍎	🍊
	Ndizi	Peazi	Chungwa

Q5 Kuna mapeazi mangapi?


Q6 Ndizi zimezidi idadi ya machungwa kwa ngapi?

Je ni muda gani kwenye hizi saa?

Q7



Q8



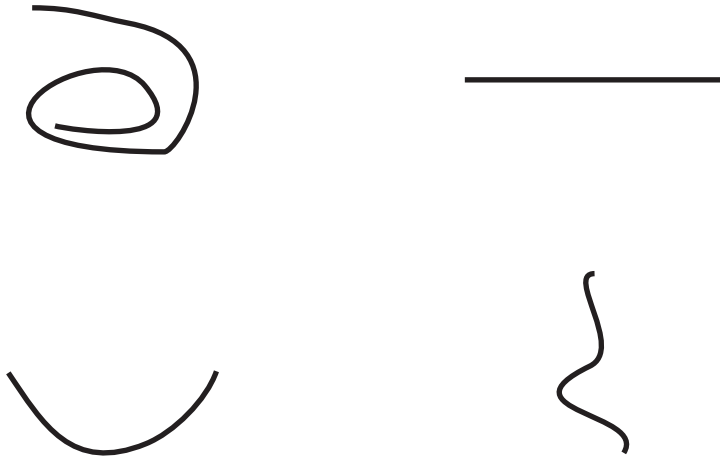
Angalia kalenda hapa kwa makini.

MACHI 2019						
JUMAPILI	JUMATATU	JUMANNE	JUMATANO	ALHAMISI	IJUMAA	JUMAMOSI
					1	2
3	4	5	6	7	8	9
10	11	12	13	14	15	16
17	18	19	20	21	22	23
24	25	26	27	28	29	30
31						

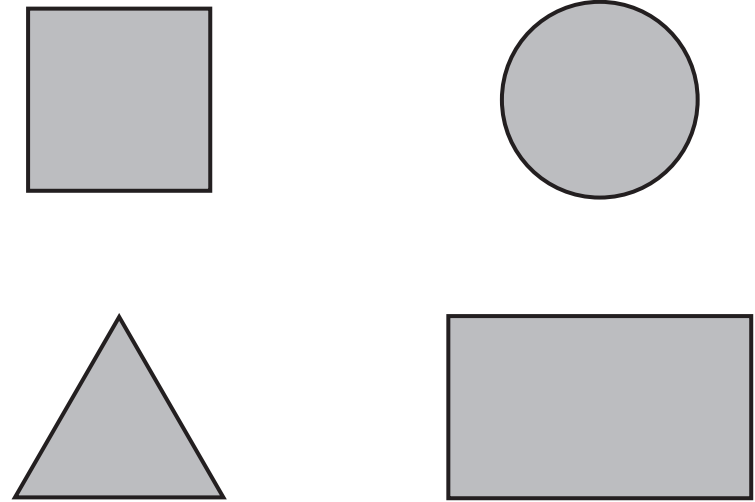
Q9 Tarehe 4 Machi ni siku gani katika wiki?

Q10 Jumatano ya pili ya mwezi ni tarehe ngapi?


Q11 Upi ni mtari mnyoofu katika mistari ifuatayo?



Q12 Angalia maumbo hapa, umbo lipi ni pembetatu?

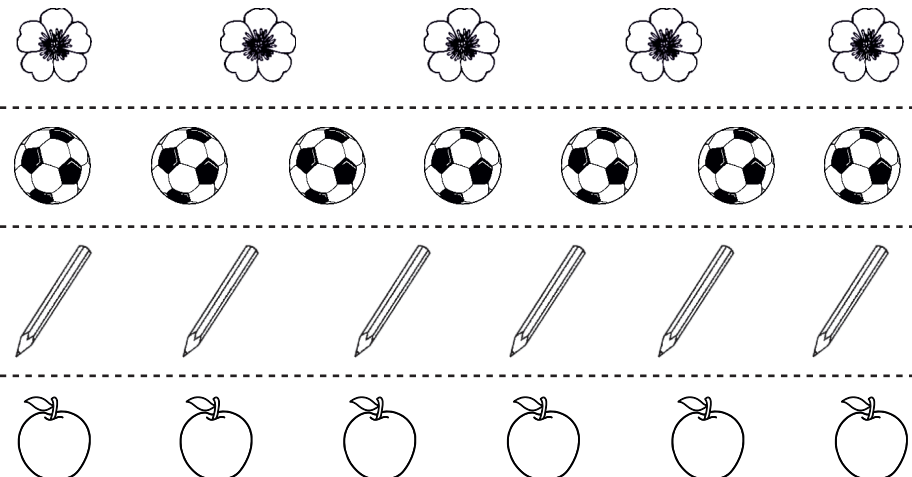


Q13 Kuna jumla ya ndege wangapi hapa? Chagua jibu sahihi



9 8 6 5

Q14 Angalia kwa makini makundi haya manne ya vitu. Je kundi lipi lina vitu vingi zaidi??



Seti ya 2

Q15 Tambua namba.

4		1
9	7	0

Angalau 4 kati ya 5 ziwe sahihi

Fanya maswali yafuatayo

Q16

$$\begin{array}{r} 34 \\ + 15 \\ \hline \hline \end{array}$$

Q17

$$\begin{array}{r} 47 \\ - 23 \\ \hline \hline \end{array}$$

Q18

$$3 \times 2 =$$

Q19

$$8 \div 4 =$$

Seti ya 3

Q20 Tambua namba.

38		44
96	20	83

Angalau 4 kati ya 5 ziwe sahihi

Fanya maswali yafuatayo

Q21

$$\begin{array}{r} 57 \\ + 18 \\ \hline \hline \end{array}$$

Q22

$$\begin{array}{r} 78 \\ - 49 \\ \hline \hline \end{array}$$

Q23

$$\begin{array}{r} 32 \\ \times 7 \\ \hline \hline \end{array}$$

Q24

$$6 \overline{) 91}$$

Q25 Sikiliza swali kwa makini, kisha fanya na utoe jibu.

Kuna watoto 41 shuleni. Kati ya hao, watoto 24 wameenda nyumbani. Wamebaki watoto wangapi shuleni?

Q26 Sikiliza swali kwa makini, kisha fanya na utoe jibu

Muuzi duka ana maua 42. Anaweka maua 3 kwenye kila kikapu. Atahitaji vikapu vingapi ili aweze kuweka maua yote?



PAL NETWORK
People's Action for Learning

